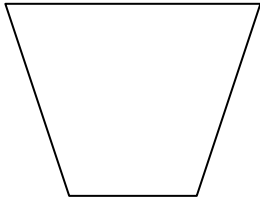


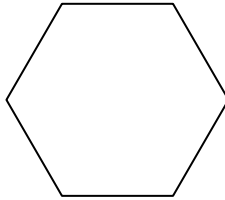
Name _____

Fractions

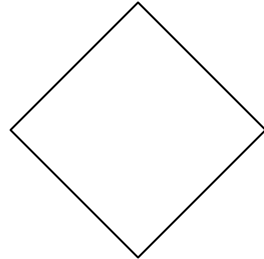
Divide each shape so you can shade the fractional part in each shape.




$\frac{1}{2}$




$\frac{1}{4}$



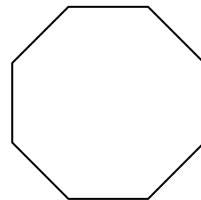
$\frac{3}{4}$



$\frac{1}{8}$



$\frac{3}{8}$



$\frac{5}{8}$

Shade the correct amount of blocks.

