


Numeracy maths/technology/english



Name: _____

Write the missing numbers.

| | | |
|------------|--|------------|
| 127 | | |
| | | |
| | | 135 |

| | | |
|--|--|------------|
| | | |
| | | |
| | | 201 |

| | | |
|-----------|--|--|
| 97 | | |
| | | |
| | | |

Use a calculator for these multiplications.

$27 \times 34 \times 69 =$

$27 \times 14 \times 69 =$


$89 \times 24 \times 99 =$

$12 \times 34 \times 39 =$

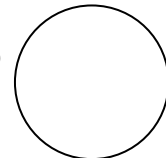
$28 \times 94 \times 19 =$

$97 \times 30 \times 29 =$

If Sam gave 27 of his 135 apples away, how many would he have left?



If Susan is 7 years older than Frank, who is 12, how old is she?



If a quarter of the 80 zebra herd were sold. How many were left?

