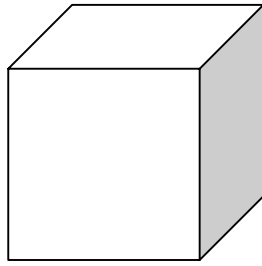
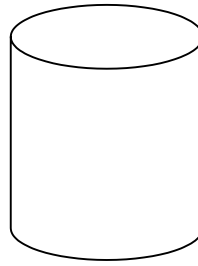



Name \_\_\_\_\_



Cube



Cylinder



Ball

a) How many corners on a cube? \_\_\_\_\_


b) Which shapes have curved surfaces? \_\_\_\_\_

c) Which shapes can roll? \_\_\_\_\_

Draw the shape of a two story building.



Draw the shape of a steam boat.



Draw the shape of a brick wall.

